



Determine which letter best represents the sum.

1) $\frac{3}{6} + \frac{2}{6}$

2) $\frac{3}{6} + \frac{5}{6}$

3) $\frac{1}{2} + \frac{1}{2}$

4) $\frac{3}{5} + \frac{2}{5}$

5) $\frac{4}{5} + \frac{3}{5}$

6) $\frac{3}{4} + \frac{3}{4}$

7) $\frac{5}{10} + \frac{5}{10}$

8) $\frac{1}{4} + \frac{1}{4}$

9) $\frac{1}{6} + \frac{5}{6}$

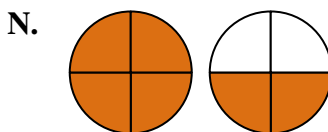
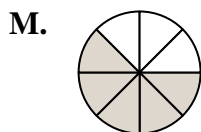
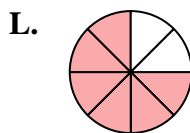
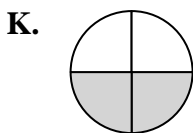
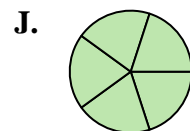
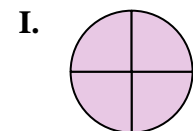
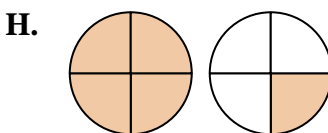
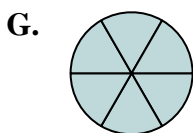
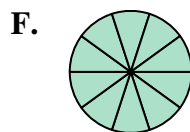
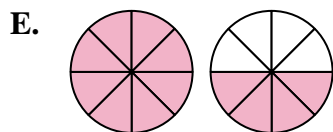
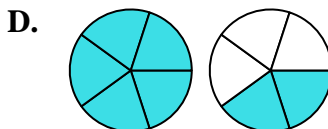
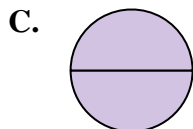
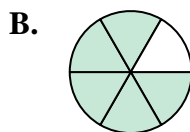
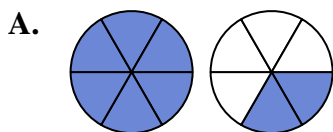
10) $\frac{7}{8} + \frac{5}{8}$

11) $\frac{1}{4} + \frac{3}{4}$

12) $\frac{2}{8} + \frac{3}{8}$

13) $\frac{2}{8} + \frac{4}{8}$

14) $\frac{2}{4} + \frac{3}{4}$



Answers

1. _____

2. _____

3. _____

4. _____

5. _____

6. _____

7. _____

8. _____

9. _____

10. _____

11. _____

12. _____

13. _____

14. _____



Determine which letter best represents the sum.

1) $\frac{3}{6} + \frac{2}{6}$

2) $\frac{3}{6} + \frac{5}{6}$

3) $\frac{1}{2} + \frac{1}{2}$

4) $\frac{3}{5} + \frac{2}{5}$

5) $\frac{4}{5} + \frac{3}{5}$

6) $\frac{3}{4} + \frac{3}{4}$

7) $\frac{5}{10} + \frac{5}{10}$

8) $\frac{1}{4} + \frac{1}{4}$

9) $\frac{1}{6} + \frac{5}{6}$

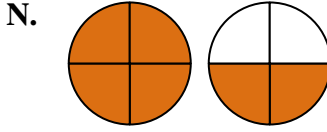
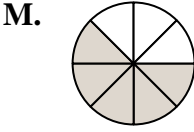
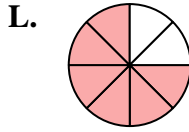
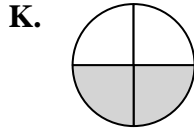
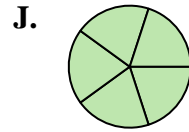
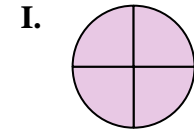
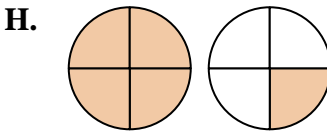
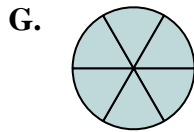
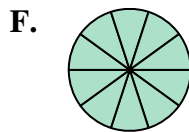
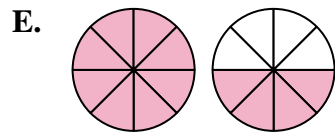
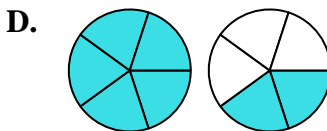
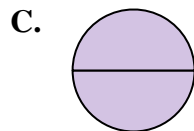
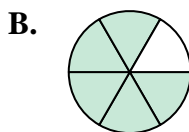
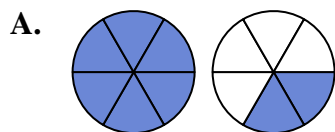
10) $\frac{7}{8} + \frac{5}{8}$

11) $\frac{1}{4} + \frac{3}{4}$

12) $\frac{2}{8} + \frac{3}{8}$

13) $\frac{2}{8} + \frac{4}{8}$

14) $\frac{2}{4} + \frac{3}{4}$



Answers

1. **B** $\frac{5}{6}$

2. **A** $1\frac{2}{6}$

3. **C** $\frac{2}{2}$

4. **J** $\frac{5}{5}$

5. **D** $1\frac{2}{5}$

6. **N** $1\frac{2}{4}$

7. **F** $\frac{10}{10}$

8. **K** $\frac{2}{4}$

9. **G** $\frac{6}{6}$

10. **E** $1\frac{4}{8}$

11. **I** $\frac{4}{4}$

12. **M** $\frac{5}{8}$

13. **L** $\frac{6}{8}$

14. **H** $1\frac{1}{4}$